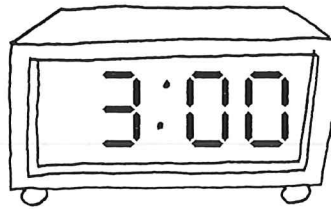



Name _____



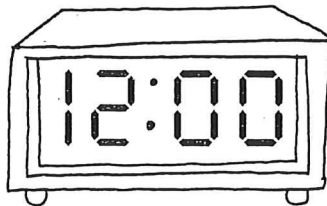
Enrichment
9.9

Compare Digital and Analog Clocks



1





2



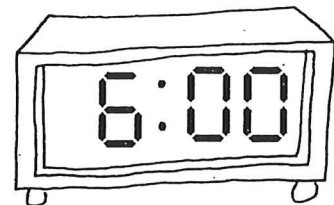


3



4



5

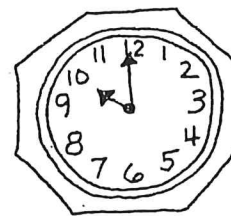






Directions: 1–5 Cross out the clock that does not show the same time.

Name _____

Reach
9.9

Compare Digital and Analog Clocks



Directions: 1–5 Say the time on the digital clock. Show that time on an analog clock.
Find the pictured analog clock with the same time. Draw a line to match the clocks that
show the same time.

Copyright © Houghton Mifflin Company. All rights reserved.


Use with Teacher's Edition pages 179A–180.

Name _____


Ticktock Time
Time to the hour

A Ladybug Hug



 Circle the box that shows the correct time.




3:00	6:00
------	------




7:00	12:00
------	-------




8:00	3:00
------	------




7:00	2:00
------	------




6:00	11:00
------	-------



4:00	10:00
------	-------



1:00	6:00
------	------



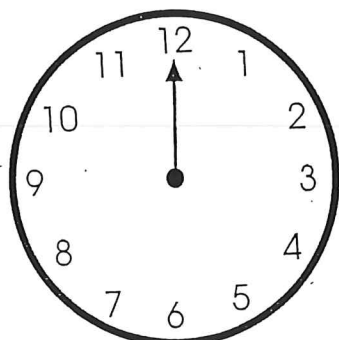
9:00	5:00
------	------

Name _____


Ticktock Time
Time to the hour

Write Time


 Draw the hour hand to show the correct time.




5:00





1:00




10:00




9:00




3:00




11:00




7:00



6:00



8:00



2:00

Name _____

Practice
10.4

Dime

1



10¢

5¢

1¢

2




9¢

10¢

11¢

3



9¢

10¢

11¢

4




12¢

11¢

10¢

5



9¢

10¢

11¢

Directions: 1–5 Circle the number of cents.

Name _____

Dime

1

2

3

4

5

6



Directions: 1–6 Circle the coins to match each price.

Name _____


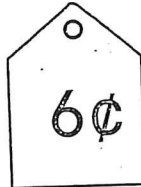
**Practice
10.3**

Nickel



1



2



3



4

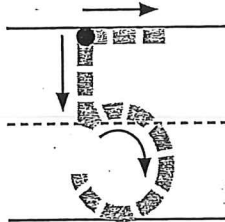


Directions: 1–4 Circle the price tag that matches the number of cents.

Name _____

Re-teach
10.3

Nickel



¢



¢



¢



¢



¢

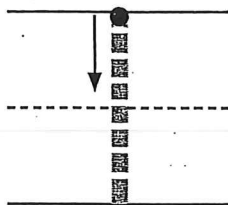
Directions: 1–5 Match and place a coin on each coin. Count the number of cents. Write the number of cents.

Name _____

Re teach
10.2

Penny

1



¢

2



¢

3



¢

4



¢

5



¢

Directions: 1–5 Match and place a coin on each coin. Count the pennies. Write the number of cents.

Name _____

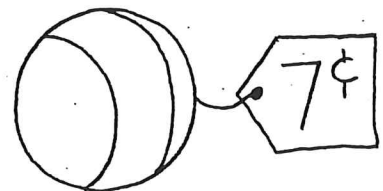
**Enrichment
10.2**

Penny

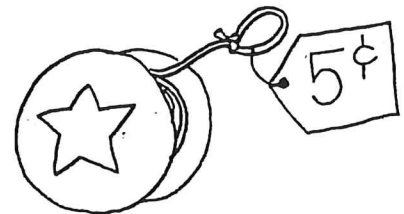
1




2



3



4



5



Directions: 1–5 Count the pennies in each set. Draw a line to show what you can buy with each set.