


Name _____



Math

Computation


Packet - 3F

#1


Reading Analog Clocks (A)


Read each time and write it in the space under the clock.































Elapsed Time (A)

How much time has elapsed between the first and second time?

First Time

Second Time

Elapsed Time

11:02 AM

3:22 PM

5:22 PM

6:15 PM

10:46 AM

2:04 PM

12:23 PM

4:52 PM

10:50 PM

11:40 PM

7:32 PM

9:30 PM

4:26 PM

8:52 PM

5:49 PM

7:37 PM

8:56 AM

10:34 AM

11:03 PM

2:16 AM

Rounding Numbers (D)

Round each number to the nearest 10.

96

90

67

28

50

65

94

13

31

96

990

423

946

246

337

859

430

703

658

422

3,022

8,598

3,227

5,045

4,530

5,308

7,985

1,392

5,040

5,620

87,494

27,241

Rounding Numbers (D)

Round each number to the nearest 100.

657

657

175

884

236

700

995

409

790

383

5,007

7,457

3,057

5,921

4,342

5,809

8,534

7,357

3,022

6,577

62,141

41,293

80,261

21,597

94,719

39,531

52,980

32,643

36,306

87,510

228,262

730,418

Rounding Numbers (D)

Round each number to the nearest 1000.

2,192

1,792

5,291

2,741

8,112

3,977

9,263

6,510

8,591

7,635

87,776

32,328

43,367

93,137

26,576

46,265

68,211

11,264

75,432

73,881

153,180

722,370

583,383

704,816

204,690

547,714

116,076

131,771

325,870

133,728

3,263,342

5,623,446

Counting U.S. Coins (E)

What is the value of each set of coins?

1.



\$ _____

2.



\$ _____

3.



\$ _____

4.



\$ _____

5.



\$ _____

6.



\$ _____

Making Change (B)

Calculate how much change is required for each transaction.

Cost of Items

Amount Paid


Change Required

1. \$1.91




\$5.00

2. \$2.18




\$5.00

3. \$2.18




\$5.00

4. \$0.06



\$5.00

5. \$1.79



\$5.00

Public Domain Images from Wikipedia.

Math-Drills.com

Column Addition (C)

Find each sum.

$$\begin{array}{r} 47 \\ 80 \\ + 33 \\ \hline \end{array}$$

$$\begin{array}{r} 51 \\ 55 \\ + 75 \\ \hline \end{array}$$

$$\begin{array}{r} 81 \\ 97 \\ + 73 \\ \hline \end{array}$$

$$\begin{array}{r} 24 \\ 81 \\ + 57 \\ \hline \end{array}$$

$$\begin{array}{r} 49 \\ 99 \\ + 48 \\ \hline \end{array}$$

$$\begin{array}{r} 18 \\ 13 \\ + 47 \\ \hline \end{array}$$

$$\begin{array}{r} 71 \\ 69 \\ + 92 \\ \hline \end{array}$$

$$\begin{array}{r} 34 \\ 10 \\ + 19 \\ \hline \end{array}$$

$$\begin{array}{r} 74 \\ 15 \\ + 92 \\ \hline \end{array}$$

$$\begin{array}{r} 91 \\ 16 \\ + 86 \\ \hline \end{array}$$

$$\begin{array}{r} 91 \\ 67 \\ + 59 \\ \hline \end{array}$$

$$\begin{array}{r} 40 \\ 93 \\ + 72 \\ \hline \end{array}$$

$$\begin{array}{r} 96 \\ 70 \\ + 56 \\ \hline \end{array}$$

$$\begin{array}{r} 90 \\ 29 \\ + 84 \\ \hline \end{array}$$

$$\begin{array}{r} 10 \\ 86 \\ + 90 \\ \hline \end{array}$$

$$\begin{array}{r} 77 \\ 64 \\ + 42 \\ \hline \end{array}$$

$$\begin{array}{r} 55 \\ 25 \\ + 20 \\ \hline \end{array}$$

$$\begin{array}{r} 20 \\ 97 \\ + 37 \\ \hline \end{array}$$

$$\begin{array}{r} 37 \\ 93 \\ + 16 \\ \hline \end{array}$$

$$\begin{array}{r} 44 \\ 98 \\ + 48 \\ \hline \end{array}$$

$$\begin{array}{r} 83 \\ 71 \\ + 37 \\ \hline \end{array}$$

$$\begin{array}{r} 39 \\ 61 \\ + 15 \\ \hline \end{array}$$

$$\begin{array}{r} 66 \\ 76 \\ + 39 \\ \hline \end{array}$$

$$\begin{array}{r} 69 \\ 70 \\ + 71 \\ \hline \end{array}$$

$$\begin{array}{r} 48 \\ 56 \\ + 74 \\ \hline \end{array}$$

Adding Four-Digit Numbers (E)

Find each sum.

$$\begin{array}{r} 6,275 \\ + 5,139 \\ \hline \end{array}$$

$$\begin{array}{r} 4,391 \\ + 2,852 \\ \hline \end{array}$$

$$\begin{array}{r} 5,799 \\ + 7,249 \\ \hline \end{array}$$

$$\begin{array}{r} 7,703 \\ + 7,054 \\ \hline \end{array}$$

$$\begin{array}{r} 8,695 \\ + 1,818 \\ \hline \end{array}$$

$$\begin{array}{r} 8,077 \\ + 7,944 \\ \hline \end{array}$$

$$\begin{array}{r} 2,045 \\ + 4,553 \\ \hline \end{array}$$

$$\begin{array}{r} 9,472 \\ + 9,928 \\ \hline \end{array}$$

$$\begin{array}{r} 1,773 \\ + 9,236 \\ \hline \end{array}$$

$$\begin{array}{r} 8,916 \\ + 1,895 \\ \hline \end{array}$$

$$\begin{array}{r} 2,054 \\ + 6,016 \\ \hline \end{array}$$

$$\begin{array}{r} 7,861 \\ + 3,491 \\ \hline \end{array}$$

$$\begin{array}{r} 3,073 \\ + 5,256 \\ \hline \end{array}$$

$$\begin{array}{r} 9,595 \\ + 5,057 \\ \hline \end{array}$$

$$\begin{array}{r} 2,689 \\ + 7,034 \\ \hline \end{array}$$

$$\begin{array}{r} 9,572 \\ + 5,373 \\ \hline \end{array}$$

$$\begin{array}{r} 1,499 \\ + 3,228 \\ \hline \end{array}$$

$$\begin{array}{r} 4,690 \\ + 2,066 \\ \hline \end{array}$$

$$\begin{array}{r} 6,207 \\ + 8,945 \\ \hline \end{array}$$

$$\begin{array}{r} 1,529 \\ + 2,501 \\ \hline \end{array}$$

$$\begin{array}{r} 9,724 \\ + 2,499 \\ \hline \end{array}$$

$$\begin{array}{r} 8,081 \\ + 6,629 \\ \hline \end{array}$$

$$\begin{array}{r} 9,133 \\ + 3,619 \\ \hline \end{array}$$

$$\begin{array}{r} 5,349 \\ + 9,525 \\ \hline \end{array}$$

$$\begin{array}{r} 7,065 \\ + 5,298 \\ \hline \end{array}$$

$$\begin{array}{r} 5,805 \\ + 9,673 \\ \hline \end{array}$$

$$\begin{array}{r} 5,774 \\ + 3,015 \\ \hline \end{array}$$

$$\begin{array}{r} 4,442 \\ + 2,223 \\ \hline \end{array}$$

$$\begin{array}{r} 3,269 \\ + 4,394 \\ \hline \end{array}$$

$$\begin{array}{r} 2,600 \\ + 1,349 \\ \hline \end{array}$$

$$\begin{array}{r} 2,236 \\ + 1,552 \\ \hline \end{array}$$

$$\begin{array}{r} 8,326 \\ + 2,720 \\ \hline \end{array}$$

$$\begin{array}{r} 5,988 \\ + 4,514 \\ \hline \end{array}$$

$$\begin{array}{r} 8,902 \\ + 4,950 \\ \hline \end{array}$$

$$\begin{array}{r} 1,932 \\ + 9,266 \\ \hline \end{array}$$

Adding Money (D)

Total each set of money amounts.

\$3.11	\$2.85	\$3.75	\$9.84	\$4.20
+ \$3.68	+ \$3.87	+ \$7.05	+ \$3.68	+ \$7.01
<hr/>	<hr/>	<hr/>	<hr/>	<hr/>

\$7.11	\$5.37	\$5.15	\$7.59	\$5.39
+ \$0.78	+ \$8.37	+ \$9.98	+ \$4.65	+ \$6.76
<hr/>	<hr/>	<hr/>	<hr/>	<hr/>

\$4.76	\$8.01	\$3.68	\$7.03	\$7.46
+ \$2.38	+ \$4.53	+ \$6.31	+ \$4.31	+ \$2.91
<hr/>	<hr/>	<hr/>	<hr/>	<hr/>

\$2.30	\$9.54	\$7.45	\$8.78	\$2.84
+ \$4.72	+ \$3.27	+ \$1.16	+ \$2.64	+ \$2.30
<hr/>	<hr/>	<hr/>	<hr/>	<hr/>

\$4.22	\$3.52	\$0.77	\$5.67	\$7.02
+ \$0.52	+ \$0.43	+ \$8.62	+ \$8.47	+ \$6.11
<hr/>	<hr/>	<hr/>	<hr/>	<hr/>

\$7.99	\$8.23	\$2.00	\$6.53	\$3.16
\$7.02	\$5.92	\$3.55	\$2.37	\$6.42
+ \$6.83	+ \$8.14	+ \$2.46	+ \$4.86	+ \$5.72
<hr/>	<hr/>	<hr/>	<hr/>	<hr/>

\$9.03	\$2.05	\$6.06	\$2.62	\$3.54
\$2.07	\$3.94	\$7.70	\$4.09	\$1.63
+ \$4.17	+ \$5.26	+ \$3.35	+ \$8.74	+ \$8.34
<hr/>	<hr/>	<hr/>	<hr/>	<hr/>

Subtracting Multi-Digit Numbers (F)

Find each difference.

$$\begin{array}{r} 6,327 \\ - 459 \\ \hline \end{array}$$

$$\begin{array}{r} 6,998 \\ - 989 \\ \hline \end{array}$$

$$\begin{array}{r} 6,249 \\ - 235 \\ \hline \end{array}$$

$$\begin{array}{r} 6,155 \\ - 971 \\ \hline \end{array}$$

$$\begin{array}{r} 8,464 \\ - 194 \\ \hline \end{array}$$

$$\begin{array}{r} 2,117 \\ - 975 \\ \hline \end{array}$$

$$\begin{array}{r} 6,774 \\ - 229 \\ \hline \end{array}$$

$$\begin{array}{r} 3,518 \\ - 443 \\ \hline \end{array}$$

$$\begin{array}{r} 7,231 \\ - 926 \\ \hline \end{array}$$

$$\begin{array}{r} 4,372 \\ - 433 \\ \hline \end{array}$$

$$\begin{array}{r} 9,438 \\ - 391 \\ \hline \end{array}$$

$$\begin{array}{r} 5,950 \\ - 185 \\ \hline \end{array}$$

$$\begin{array}{r} 7,400 \\ - 992 \\ \hline \end{array}$$

$$\begin{array}{r} 2,013 \\ - 836 \\ \hline \end{array}$$

$$\begin{array}{r} 5,790 \\ - 531 \\ \hline \end{array}$$

$$\begin{array}{r} 7,895 \\ - 649 \\ \hline \end{array}$$

$$\begin{array}{r} 7,667 \\ - 360 \\ \hline \end{array}$$

$$\begin{array}{r} 7,144 \\ - 232 \\ \hline \end{array}$$

$$\begin{array}{r} 6,946 \\ - 960 \\ \hline \end{array}$$

$$\begin{array}{r} 4,737 \\ - 465 \\ \hline \end{array}$$

$$\begin{array}{r} 8,562 \\ - 800 \\ \hline \end{array}$$

$$\begin{array}{r} 4,995 \\ - 823 \\ \hline \end{array}$$

$$\begin{array}{r} 6,769 \\ - 430 \\ \hline \end{array}$$

$$\begin{array}{r} 4,228 \\ - 787 \\ \hline \end{array}$$

$$\begin{array}{r} 7,981 \\ - 319 \\ \hline \end{array}$$

$$\begin{array}{r} 3,311 \\ - 463 \\ \hline \end{array}$$

$$\begin{array}{r} 4,694 \\ - 955 \\ \hline \end{array}$$

$$\begin{array}{r} 3,037 \\ - 755 \\ \hline \end{array}$$

Subtracting Money (A)

Subtract each set of money amounts.

$\begin{array}{r} \$5.95 \\ - \$0.90 \\ \hline \end{array}$	$\begin{array}{r} \$13.88 \\ - \$9.81 \\ \hline \end{array}$	$\begin{array}{r} \$8.78 \\ - \$3.45 \\ \hline \end{array}$	$\begin{array}{r} \$9.49 \\ - \$3.85 \\ \hline \end{array}$	$\begin{array}{r} \$19.25 \\ - \$9.61 \\ \hline \end{array}$
---	--	---	---	--

$\begin{array}{r} \$13.63 \\ - \$5.02 \\ \hline \end{array}$	$\begin{array}{r} \$5.77 \\ - \$5.48 \\ \hline \end{array}$	$\begin{array}{r} \$7.59 \\ - \$4.06 \\ \hline \end{array}$	$\begin{array}{r} \$8.87 \\ - \$4.15 \\ \hline \end{array}$	$\begin{array}{r} \$8.72 \\ - \$8.19 \\ \hline \end{array}$
--	---	---	---	---

$\begin{array}{r} \$6.48 \\ - \$0.45 \\ \hline \end{array}$	$\begin{array}{r} \$10.09 \\ - \$4.20 \\ \hline \end{array}$	$\begin{array}{r} \$4.91 \\ - \$2.01 \\ \hline \end{array}$	$\begin{array}{r} \$18.74 \\ - \$9.37 \\ \hline \end{array}$	$\begin{array}{r} \$3.86 \\ - \$3.39 \\ \hline \end{array}$
---	--	---	--	---

$\begin{array}{r} \$14.09 \\ - \$8.60 \\ \hline \end{array}$	$\begin{array}{r} \$5.27 \\ - \$2.12 \\ \hline \end{array}$	$\begin{array}{r} \$3.04 \\ - \$0.83 \\ \hline \end{array}$	$\begin{array}{r} \$18.03 \\ - \$9.43 \\ \hline \end{array}$	$\begin{array}{r} \$10.26 \\ - \$6.66 \\ \hline \end{array}$
--	---	---	--	--

$\begin{array}{r} \$10.05 \\ - \$9.73 \\ \hline \end{array}$	$\begin{array}{r} \$7.41 \\ - \$6.97 \\ \hline \end{array}$	$\begin{array}{r} \$6.89 \\ - \$0.14 \\ \hline \end{array}$	$\begin{array}{r} \$14.10 \\ - \$6.37 \\ \hline \end{array}$	$\begin{array}{r} \$18.99 \\ - \$9.34 \\ \hline \end{array}$
--	---	---	--	--

Name: _____

Score: _____

Words in Numerals

Write the words in numerals:

- 1) two thousand, six hundred forty _____
- 2) six thousand, four hundred sixty-six _____
- 3) three thousand, six hundred three _____
- 4) two thousand, twenty-nine _____
- 5) eight thousand, nine hundred seventy-six _____
- 6) nine thousand, one hundred one _____
- 7) four thousand, five hundred thirty-one _____
- 8) three thousand, three hundred fifty-nine _____
- 9) seven thousand, nine hundred seventy-two _____
- 10) eight thousand, one hundred fifty-two _____
- 11) one thousand, two hundred ninety-seven _____
- 12) one thousand, eight hundred eighty-three _____
- 13) seven thousand, eight hundred ninety-four _____
- 14) nine thousand, seven hundred eighty-five _____
- 15) five thousand, seven hundred eighteen _____